


Les additions imagées

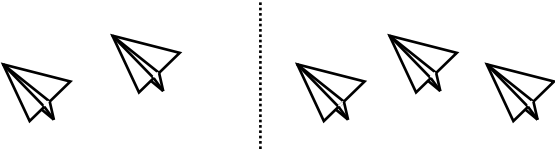
Trouve la somme de chaque addition.

a)




$1 + 2 = \underline{\quad}$

b)




$2 + 3 = \underline{\quad}$

c)




$3 + 0 = \underline{\quad}$

d)



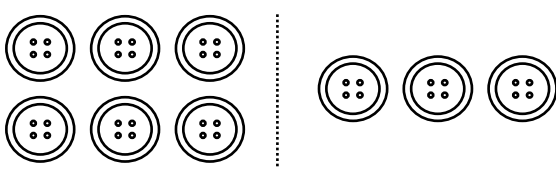
$2 + 1 = \underline{\quad}$

e)



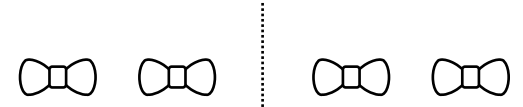
$4 + 2 = \underline{\quad}$

f)



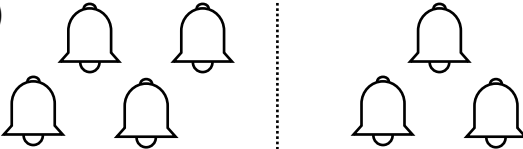
$6 + 3 = \underline{\quad}$

g)



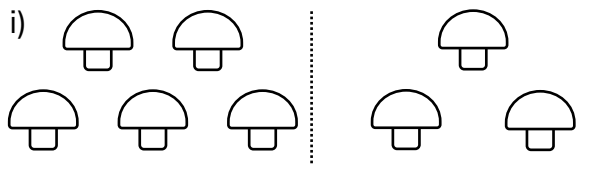
$2 + 2 = \underline{\quad}$

h)



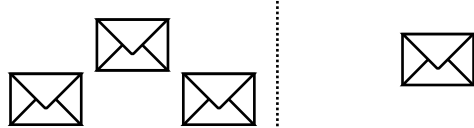
$4 + 3 = \underline{\quad}$

i)



$5 + 3 = \underline{\quad}$

j)




$3 + 1 = \underline{\quad}$

Nom : _____ Date : _____

Les additions imagées

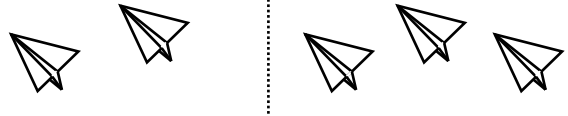
Trouve la somme de chaque addition.

a)




$$1 + 2 = \underline{3}$$

b)



$$2 + 3 = \underline{5}$$

c)



$$3 + 0 = \underline{3}$$

d)



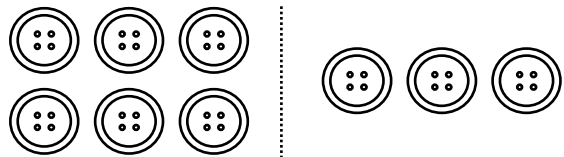
$$2 + 1 = \underline{3}$$

e)



$$4 + 2 = \underline{6}$$

f)



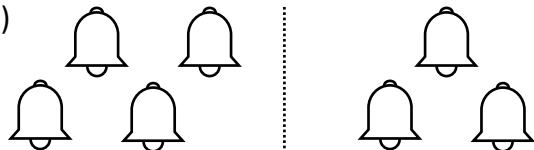
$$6 + 3 = \underline{9}$$

g)



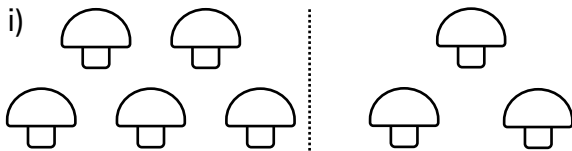
$$2 + 2 = \underline{4}$$

h)



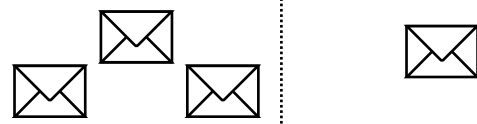
$$4 + 3 = \underline{7}$$

i)



$$5 + 3 = \underline{8}$$

j)



$$3 + 1 = \underline{4}$$