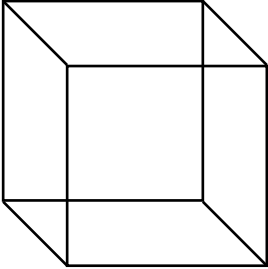
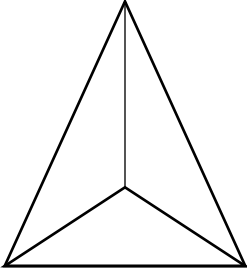
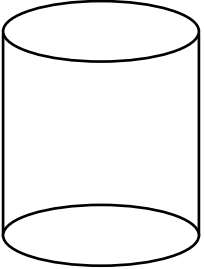
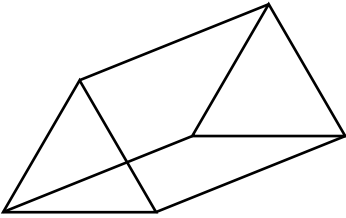
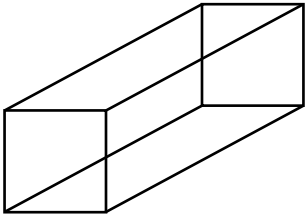
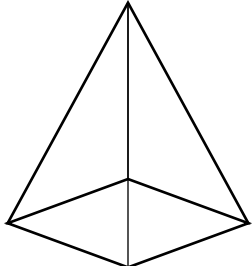
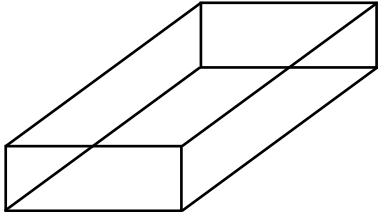
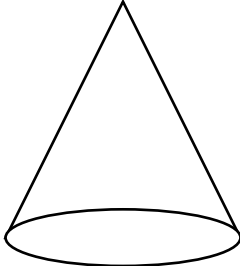
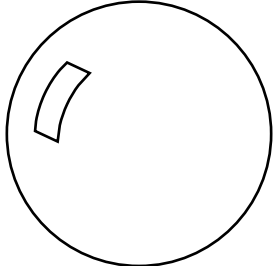


Les solides

Écris le nombre de faces que possède chaque solide.

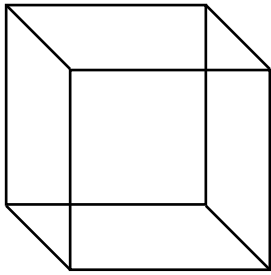
<p>a)</p>  <p style="text-align: center;">_____ faces</p>	<p>b)</p>  <p style="text-align: center;">_____ faces</p>	<p>c)</p>  <p style="text-align: center;">_____ faces</p>
<p>d)</p>  <p style="text-align: center;">_____ faces</p>	<p>e)</p>  <p style="text-align: center;">_____ faces</p>	<p>f)</p>  <p style="text-align: center;">_____ faces</p>
<p>g)</p>  <p style="text-align: center;">_____ faces</p>	<p>h)</p>  <p style="text-align: center;">_____ faces</p>	<p>i)</p>  <p style="text-align: center;">_____ faces</p>

Nom : _____ Date : _____

Les solides

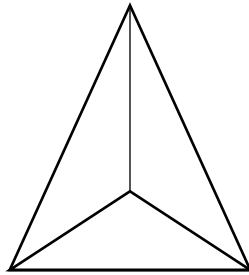
Écris le nombre de faces que possède chaque solide.

a)



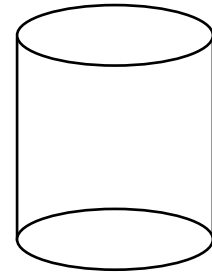
___ 6 ___ faces

b)



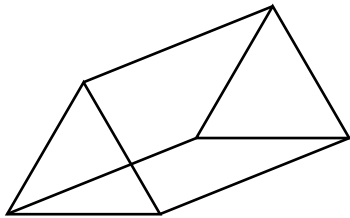
___ 4 ___ faces

c)



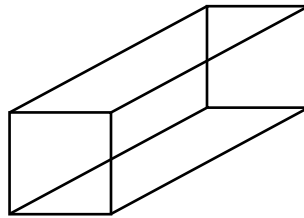
___ 3 ___ faces

d)



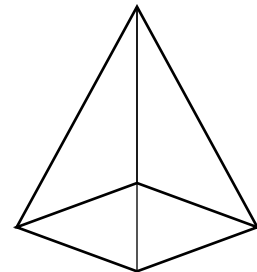
___ 5 ___ faces

e)



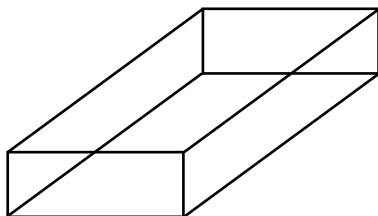
___ 6 ___ faces

f)



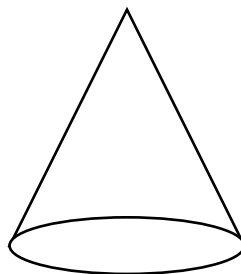
___ 5 ___ faces

g)



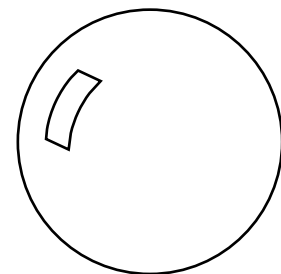
___ 6 ___ faces

h)



___ 2 ___ faces

i)



___ 1 ___ faces