




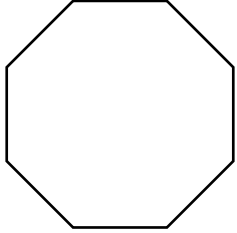
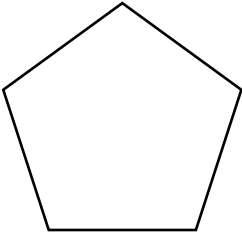


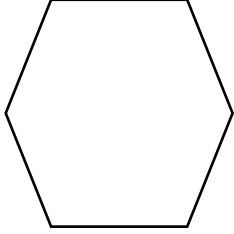
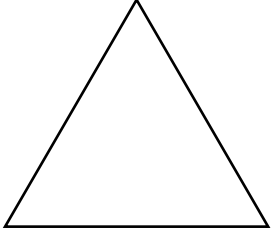



Les figures planes

Écris le nombre d'angles que contient chaque figure plane.

<p>a)</p>  <p style="text-align: center;">_____ angles</p>	<p>b)</p>  <p style="text-align: center;">_____ angles</p>	<p>c)</p>  <p style="text-align: center;">_____ angles</p>
<p>d)</p>  <p style="text-align: center;">_____ angle(s)</p>	<p>e)</p>  <p style="text-align: center;">_____ angles</p>	<p>f)</p>  <p style="text-align: center;">_____ angles</p>
<p>g)</p>  <p style="text-align: center;">_____ angles</p>	<p>h)</p>  <p style="text-align: center;">_____ angles</p>	<p>i)</p>  <p style="text-align: center;">_____ angles</p>
<p>j)</p>  <p style="text-align: center;">_____ angles</p>	<p>k)</p>  <p style="text-align: center;">_____ angles</p>	<p>l)</p>  <p style="text-align: center;">_____ angles</p>


Nom : _____

Date : _____

Les figures planes


Écris le nombre d'angles que contient chaque figure plane.

a)




4 angles

b)




4 angles

c)



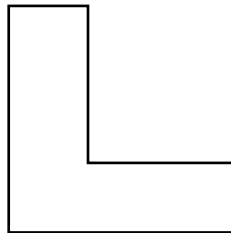
4 angles

d)



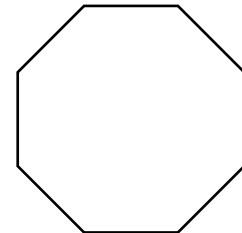
1 angle(s)

e)



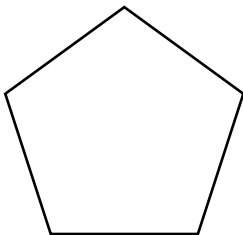
6 angles

f)



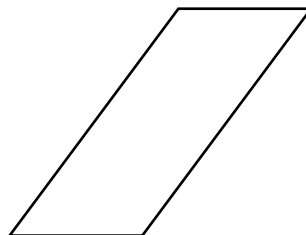
8 angles

g)




5 angles

h)



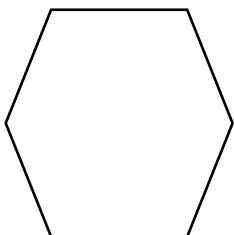
4 angles

i)



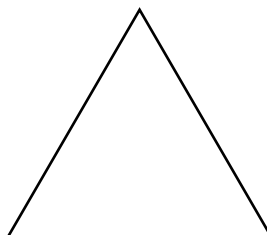
10 angles

j)




6 angles

k)



3 angles

l)



4 angles