


Les additions trouées

Dessine le nombre de points manquants dans chaque addition.


a)



+




+




=

9


b)



+




+



=

10


c)



+




+



=

13


d)



+



+



=

17


e)



+



+



=

12