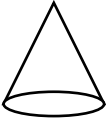
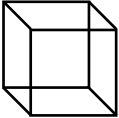
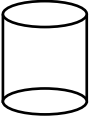
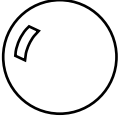
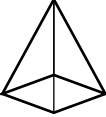
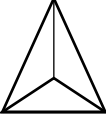
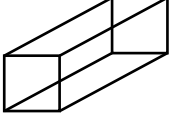
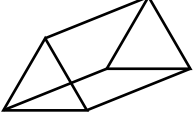
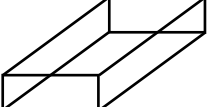


Les solides


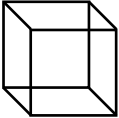
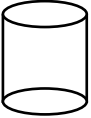
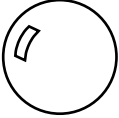
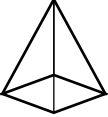
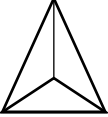
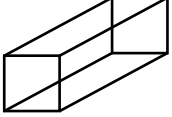
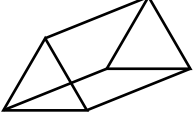
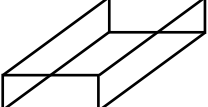
Relie chaque solide à son nom.

- | | | | | | |
|----|-------------------------------------------------------------------------------------|---|--|---|------------------------------|
| a) |  | ● | | ● | prisme à base triangulaire |
| b) |  | ● | | ● | sphère |
| c) |  | ● | | ● | cylindre |
| d) |  | ● | | ● | pyramide à base carrée |
| e) |  | ● | | ● | prisme à base carrée |
| f) |  | ● | | ● | prisme à base rectangulaire |
| g) |  | ● | | ● | pyramide à base triangulaire |
| h) |  | ● | | ● | cône |
| i) |  | ● | | ● | cube |

Nom : _____ Date : _____

Les solides

Relie chaque solide à son nom.

a)		●	●	prisme à base triangulaire
b)		●	●	sphère
c)		●	●	cylindre
d)		●	●	pyramide à base carrée
e)		●	●	prisme à base carrée
f)		●	●	prisme à base rectangulaire
g)		●	●	pyramide à base triangulaire
h)		●	●	cône
i)		●	●	cube