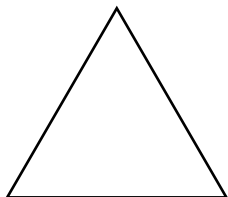


Les figures planes


Relie chaque figure plane à son nom.

a)



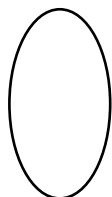
carré

b)




ovale

c)




cercle

d)



rectangle

e)



losange

f)




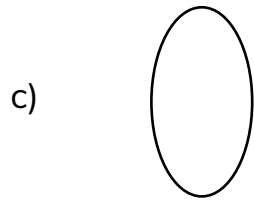
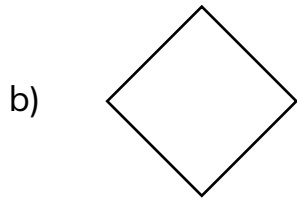
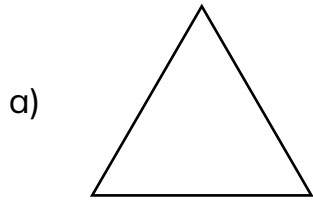


triangle

Nom : _____ Date : _____

Les figures planes

Relie chaque figure plane à son nom.



● carré

● ovale

● cercle

● rectangle

● losange

● triangle