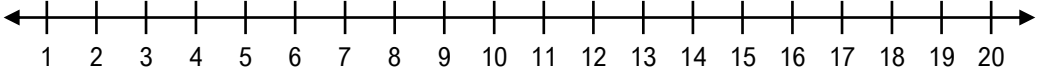
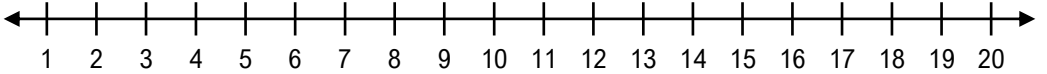
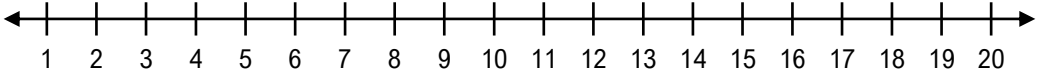


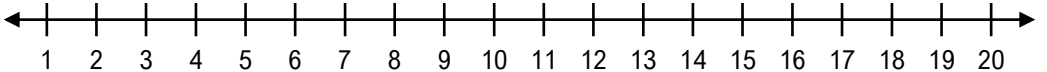
## Additionner sur une droite numérique

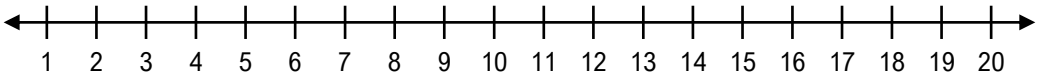
Trouve la somme de chaque addition en te servant de la droite numérique.

a)  $1 + 6 = \square$  

b)  $2 + 4 = \square$  

c)  $2 + 5 = \square$  

d)  $6 + 2 = \square$  

e)  $1 + 2 = \square$  

f)  $5 + 3 = \square$  