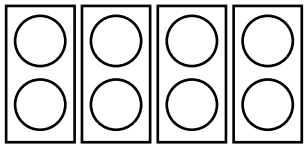
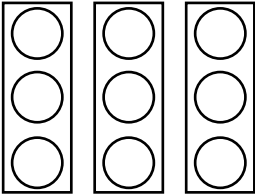


La division Comparer des quotients

Représente chaque équation en dessinant des groupes de billes.
Écris ensuite le résultat de chaque équation, puis compare les à l'aide des symboles $>$, $<$ ou $=$.

Ex.  

$8 \div 2 = 4$ $>$ $9 \div 3 = 3$

a) $15 \div 5 =$ $12 \div 3 =$

b) $6 \div 2 =$ $24 \div 8 =$

c) $12 \div 6 =$ $16 \div 4 =$

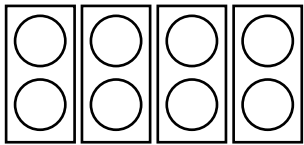
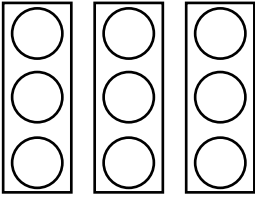
d) $8 \div 4 =$ $6 \div 3 =$

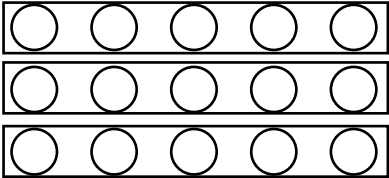
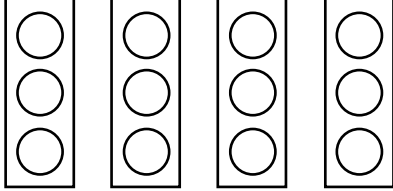


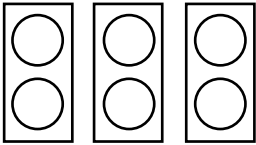
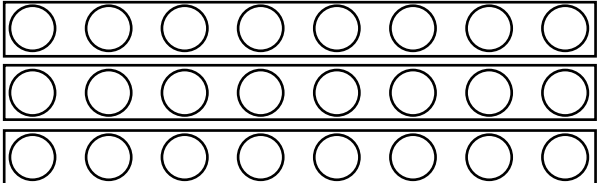
La division

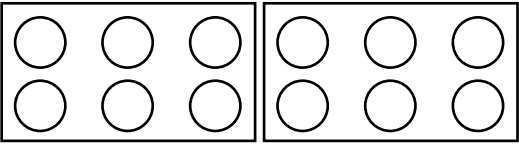
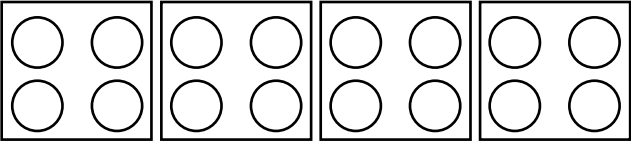
Comparer des quotients

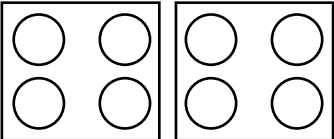

Représente chaque équation en dessinant des groupes de billes.
Écris ensuite le résultat de chaque équation, puis compare les à l'aide des symboles $>$, $<$ ou $=$.

Ex.  $8 \div 2 = 4$ $>$  $9 \div 3 = 3$

a)  $15 \div 5 = 3$ $<$  $12 \div 3 = 4$

b)  $6 \div 2 = 3$ $=$  $24 \div 8 = 3$

c)  $12 \div 6 = 2$ $<$  $16 \div 4 = 4$

d)  $8 \div 4 = 2$ $=$  $6 \div 3 = 2$