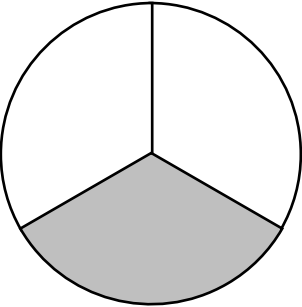
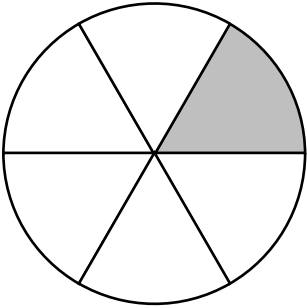



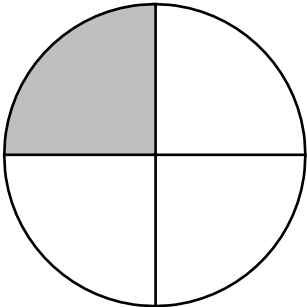

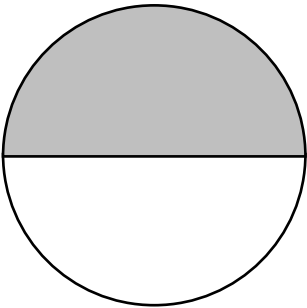



Les fractions

Pour chaque figure, complète la fraction qui est représentée.

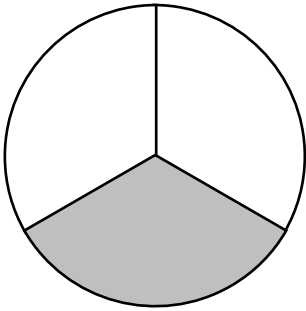
<p>a)</p>  <div style="text-align: center; margin-top: 20px;"> $\frac{1}{\quad}$ </div>	<p>b)</p>  <div style="text-align: center; margin-top: 20px;"> $\frac{1}{\quad}$ </div>	<p>c)</p>  <div style="text-align: center; margin-top: 20px;"> $\frac{1}{\quad}$ </div>
<p>d)</p>  <div style="text-align: center; margin-top: 20px;"> $\frac{1}{\quad}$ </div>	<p>e)</p>  <div style="text-align: center; margin-top: 20px;"> $\frac{1}{\quad}$ </div>	<p>f)</p>  <div style="text-align: center; margin-top: 20px;"> $\frac{1}{\quad}$ </div>
<p>g)</p>  <div style="text-align: center; margin-top: 20px;"> $\frac{1}{\quad}$ </div>	<p>h)</p>  <div style="text-align: center; margin-top: 20px;"> $\frac{1}{\quad}$ </div>	<p>i)</p>  <div style="text-align: center; margin-top: 20px;"> $\frac{1}{\quad}$ </div>

Nom : _____ Date : _____

Les fractions

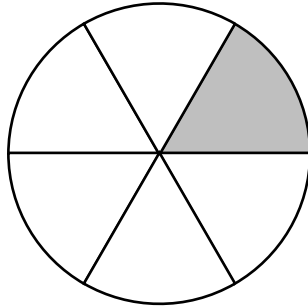
Pour chaque figure, complète la fraction qui est représentée.

a)



$$\frac{1}{3}$$

b)




$$\frac{1}{6}$$

c)



$$\frac{1}{3}$$

d)



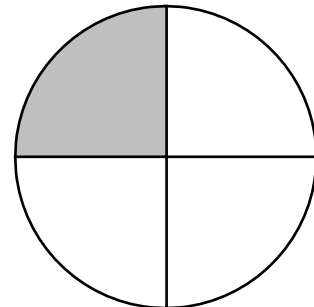
$$\frac{1}{5}$$

e)



$$\frac{1}{4}$$

f)



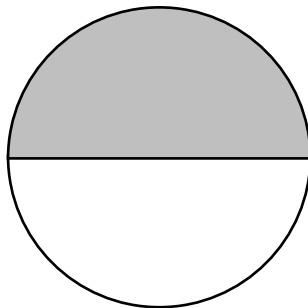
$$\frac{1}{4}$$

g)




$$\frac{1}{2}$$

h)



$$\frac{1}{2}$$

i)



$$\frac{1}{6}$$