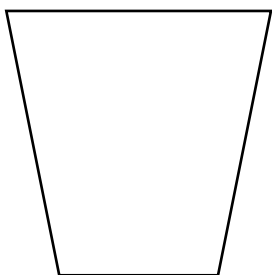


Les figures planes

Côtés et sommets


Écris le nombre de côtés et de sommets que contient
chacune des figures planes.

a)



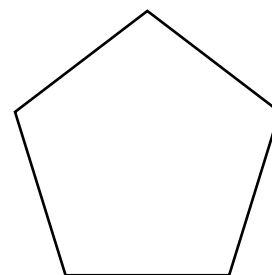
___ côté(s)
___ sommet(s)

b)




___ côté(s)
___ sommet(s)

c)



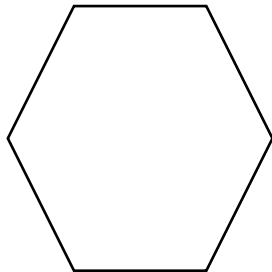
___ côté(s)
___ sommet(s)

d)




___ côté(s)
___ sommet(s)

e)




___ côté(s)
___ sommet(s)

f)



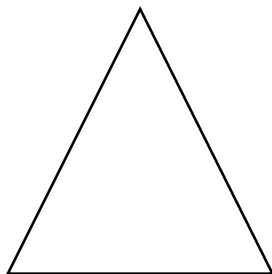
___ côté(s)
___ sommet(s)

g)



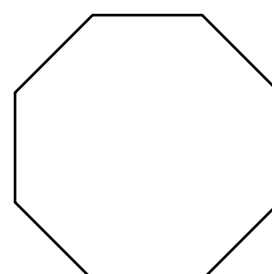
___ côté(s)
___ sommet(s)

h)



___ côté(s)
___ sommet(s)

i)



___ côté(s)
___ sommet(s)

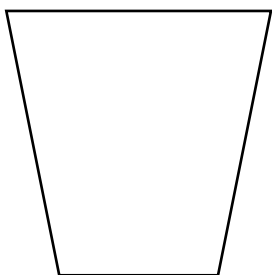
Nom : _____ Date : _____

Les figures planes

Côtés et sommets


Écris le nombre de côtés et de sommets que contient
chacune des figures planes.

a)



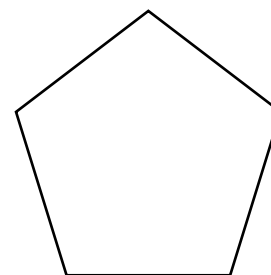
 4 côté(s)
 4 sommet(s)

b)




 6 côté(s)
 6 sommet(s)

c)



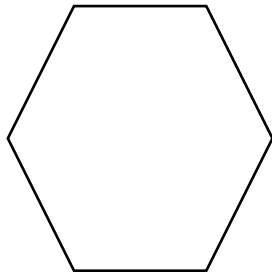
 5 côté(s)
 5 sommet(s)

d)




 4 côté(s)
 4 sommet(s)

e)




 6 côté(s)
 6 sommet(s)

f)



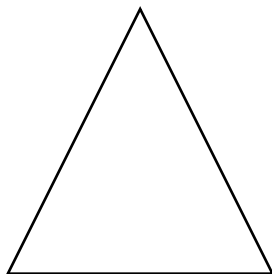
 8 côté(s)
 8 sommet(s)

g)



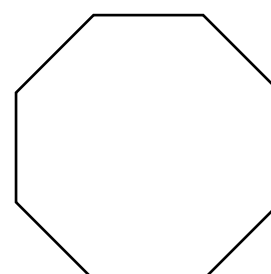
 1 côté(s)
 0 sommet(s)

h)



 3 côté(s)
 3 sommet(s)

i)



 8 côté(s)
 8 sommet(s)