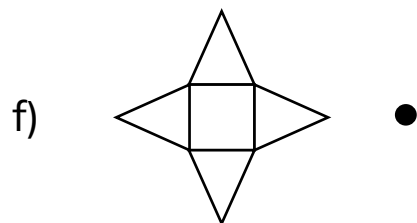
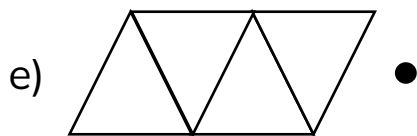
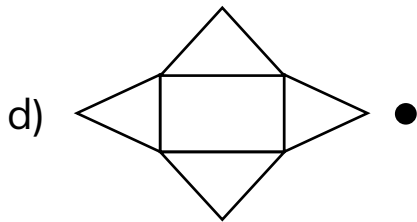
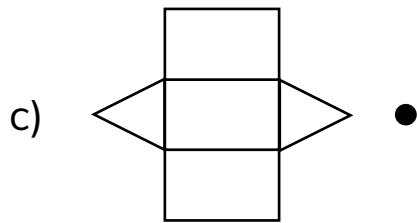
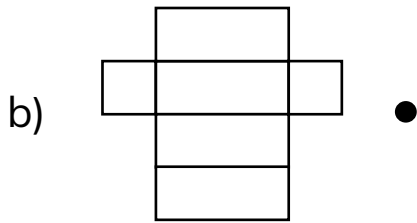
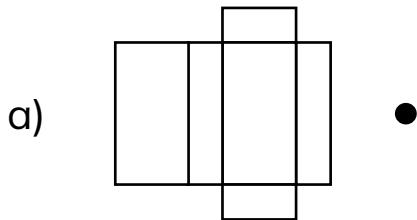


# Les solides et les développements

Relie chaque développement au nom du solide correspondant.



● Pyramide à base carrée

● Prisme à base rectangulaire

● Prisme à base triangulaire

● Pyramide à base triangulaire

● Prisme à base carrée

● Pyramide à base rectangulaire