



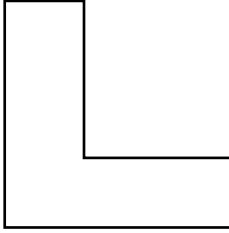
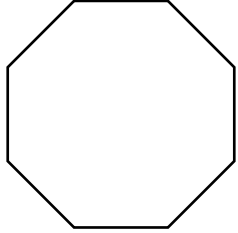
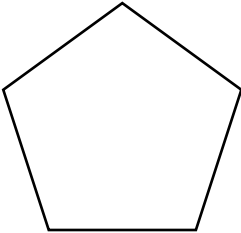


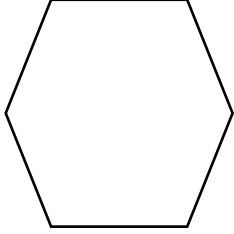
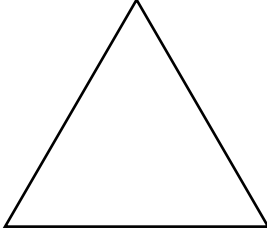



Les figures planes

Écris le nombre d'angles que contient chaque figure plane.

<p>a)</p>  <p style="text-align: center;">_____ angles</p>	<p>b)</p>  <p style="text-align: center;">_____ angles</p>	<p>c)</p>  <p style="text-align: center;">_____ angles</p>
<p>d)</p>  <p style="text-align: center;">_____ angle(s)</p>	<p>e)</p>  <p style="text-align: center;">_____ angles</p>	<p>f)</p>  <p style="text-align: center;">_____ angles</p>
<p>g)</p>  <p style="text-align: center;">_____ angles</p>	<p>h)</p>  <p style="text-align: center;">_____ angles</p>	<p>i)</p>  <p style="text-align: center;">_____ angles</p>
<p>j)</p>  <p style="text-align: center;">_____ angles</p>	<p>k)</p>  <p style="text-align: center;">_____ angles</p>	<p>l)</p>  <p style="text-align: center;">_____ angles</p>