



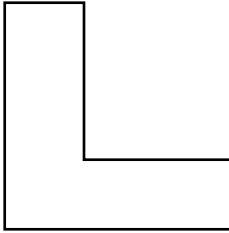
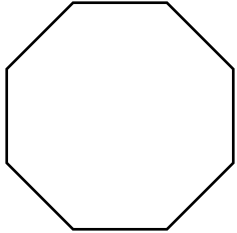
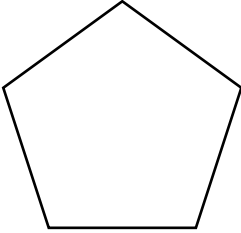
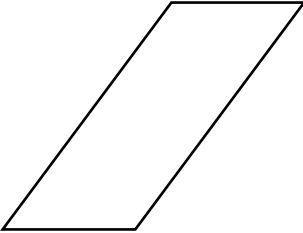

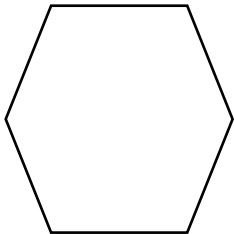
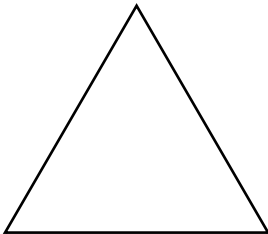



# Les figures planes

Écris le nombre de côtés et d'angles que contient chaque figure plane.

<p>a)</p>  <p>_____ côtés _____ angles</p>	<p>b)</p>  <p>_____ côtés _____ angles</p>	<p>c)</p>  <p>_____ côtés _____ angles</p>
<p>d)</p>  <p>_____ côtés _____ angles</p>	<p>e)</p>  <p>_____ côtés _____ angles</p>	<p>f)</p>  <p>_____ côtés _____ angles</p>
<p>g)</p>  <p>_____ côtés _____ angles</p>	<p>h)</p>  <p>_____ côtés _____ angles</p>	<p>i)</p>  <p>_____ côtés _____ angles</p>
<p>j)</p>  <p>_____ côtés _____ angles</p>	<p>k)</p>  <p>_____ côtés _____ angles</p>	<p>l)</p>  <p>_____ côtés _____ angles</p>


Nom : \_\_\_\_\_

Date : \_\_\_\_\_

## Les figures planes


Écris le nombre de côtés et d'angles que contient chaque figure plane.

a)



  4   côtés  
  4   angles

b)




  4   côtés  
  4   angles

c)



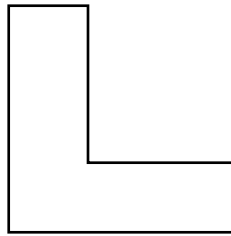
  4   côtés  
  4   angles

d)



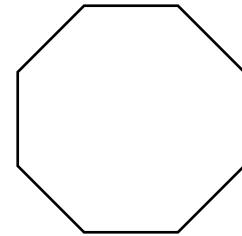
  1   côtés  
  1   angles

e)



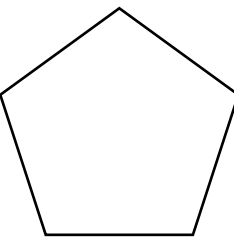
  6   côtés  
  6   angles

f)



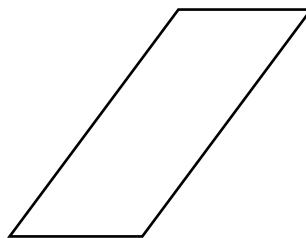
  8   côtés  
  8   angles

g)




  5   côtés  
  5   angles

h)



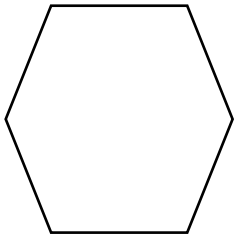
  4   côtés  
  4   angles

i)



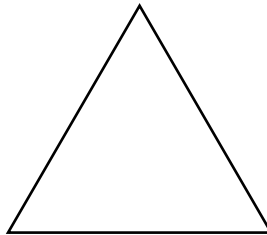
 10  côtés  
 10  angles

j)




  6   côtés  
  6   angles

k)



  3   côtés  
  3   angles

l)



  4   côtés  
  4   angles