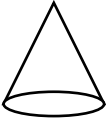
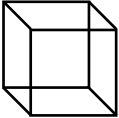
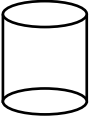
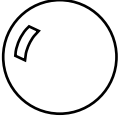
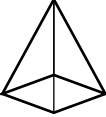
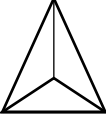
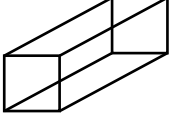
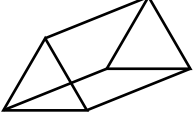
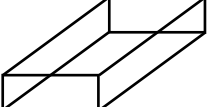


Les solides

Relie chaque solide à son nom.

- | | | | | | |
|----|---|---|--|---|------------------------------|
| a) |  | ● | | ● | prisme à base triangulaire |
| b) |  | ● | | ● | sphère |
| c) |  | ● | | ● | cylindre |
| d) |  | ● | | ● | pyramide à base carrée |
| e) |  | ● | | ● | prisme à base carrée |
| f) |  | ● | | ● | prisme à base rectangulaire |
| g) |  | ● | | ● | pyramide à base triangulaire |
| h) |  | ● | | ● | cône |
| i) |  | ● | | ● | cube |