


Les figures planes

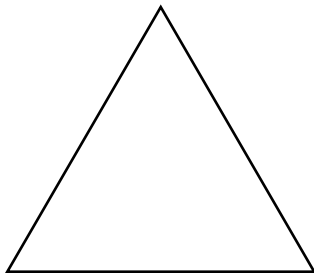
Compte et écris le nombre de côtés que possède chaque figure plane.

a)



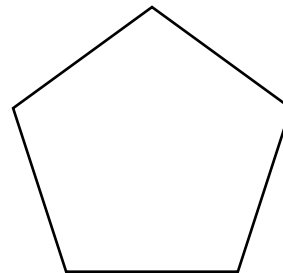
_____ côtés

b)



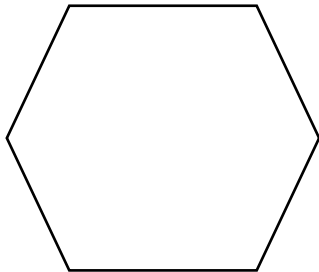
_____ côtés

c)




_____ côtés

d)



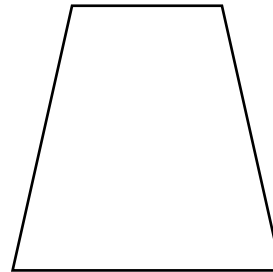
_____ côtés

e)



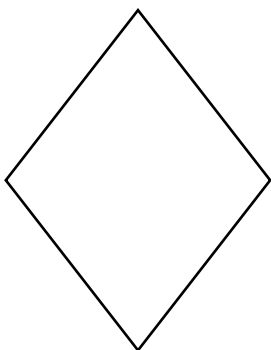
_____ côtés

f)



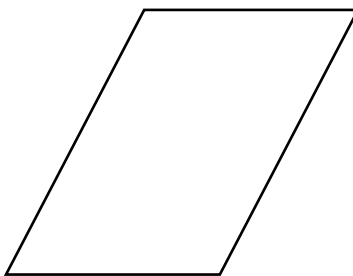
_____ côtés

g)



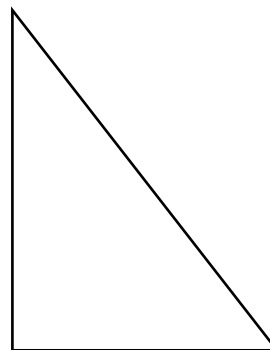
_____ côtés

h)



_____ côtés

i)



_____ côtés


Nom : _____

Date : _____

Les figures planes

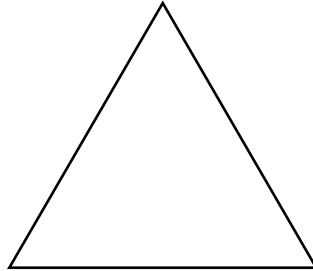
Compte et écris le nombre de côtés que possède chaque figure plane.

a)



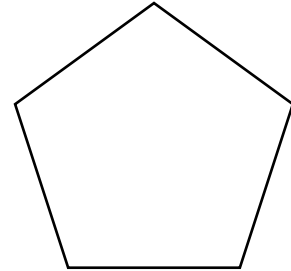
___ 4 ___ côtés

b)



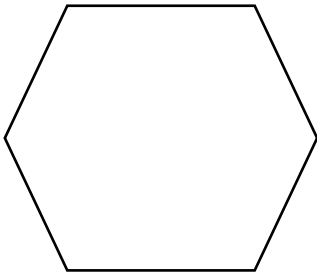
___ 3 ___ côtés

c)



___ 5 ___ côtés

d)



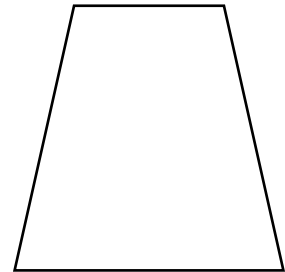
___ 6 ___ côtés

e)



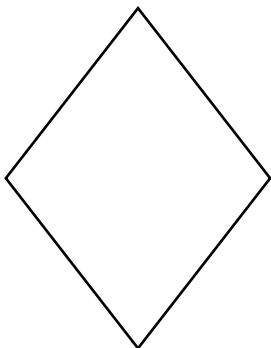
___ 4 ___ côtés

f)



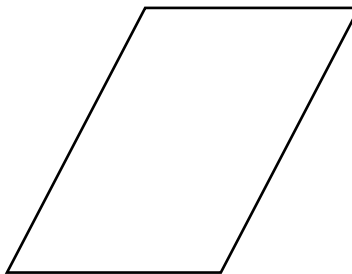
___ 4 ___ côtés

g)



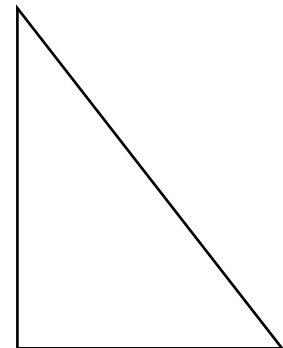
___ 4 ___ côtés

h)



___ 4 ___ côtés

i)



___ 3 ___ côtés