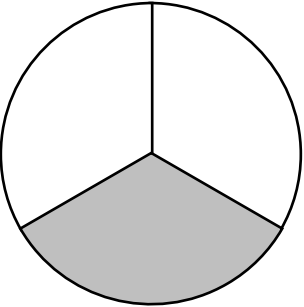
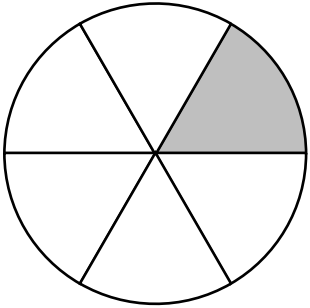



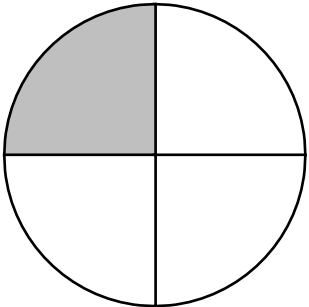

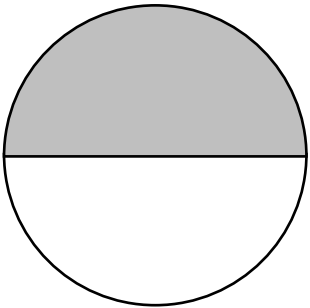



Les fractions

Pour chaque figure, complète la fraction qui est représentée.

<p>a)</p>  <div style="text-align: center; margin-top: 20px;"> $\frac{1}{\quad}$ </div>	<p>b)</p>  <div style="text-align: center; margin-top: 20px;"> $\frac{1}{\quad}$ </div>	<p>c)</p>  <div style="text-align: center; margin-top: 20px;"> $\frac{1}{\quad}$ </div>
<p>d)</p>  <div style="text-align: center; margin-top: 20px;"> $\frac{1}{\quad}$ </div>	<p>e)</p>  <div style="text-align: center; margin-top: 20px;"> $\frac{1}{\quad}$ </div>	<p>f)</p>  <div style="text-align: center; margin-top: 20px;"> $\frac{1}{\quad}$ </div>
<p>g)</p>  <div style="text-align: center; margin-top: 20px;"> $\frac{1}{\quad}$ </div>	<p>h)</p>  <div style="text-align: center; margin-top: 20px;"> $\frac{1}{\quad}$ </div>	<p>i)</p>  <div style="text-align: center; margin-top: 20px;"> $\frac{1}{\quad}$ </div>