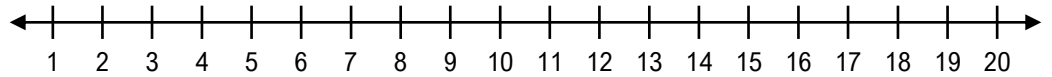


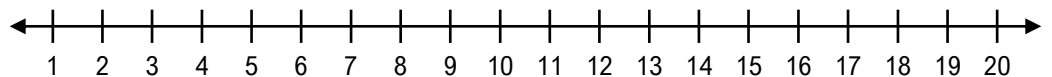
## Soustraire sur une droite numérique

Trouve la différence de chaque soustraction en te servant de la droite numérique.

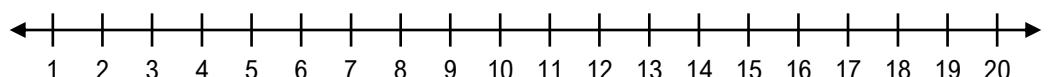
a)  $5 - 3 = \square$



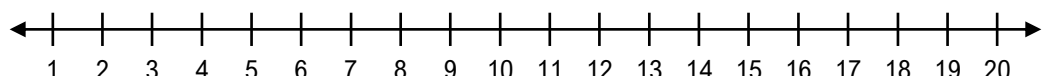
b)  $2 - 1 = \square$



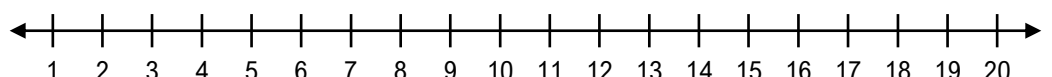
c)  $6 - 2 = \square$



d)  $5 - 1 = \square$



e)  $7 - 2 = \square$



f)  $9 - 3 = \square$

