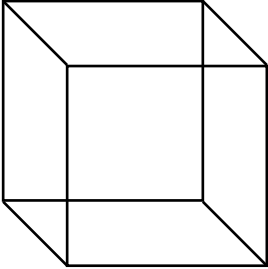
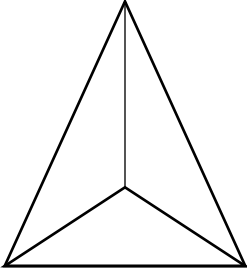
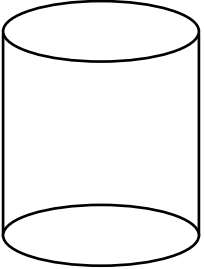
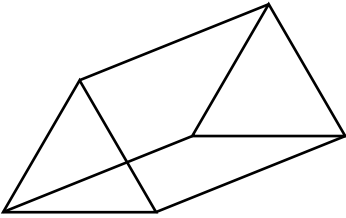
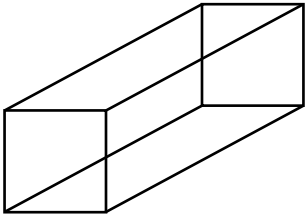
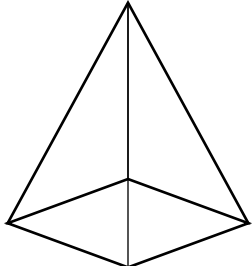
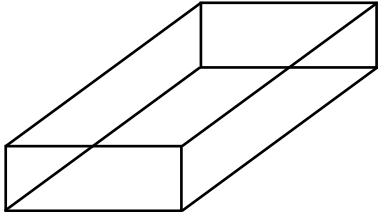
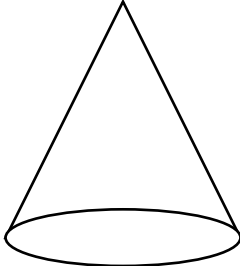
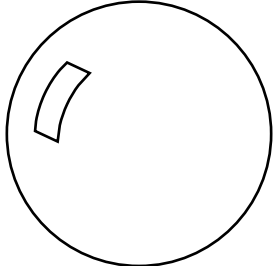


# Les solides

Écris le nombre de faces que possède chaque solide.

<p>a)</p>  <p style="text-align: center;">_____ faces</p>	<p>b)</p>  <p style="text-align: center;">_____ faces</p>	<p>c)</p>  <p style="text-align: center;">_____ faces</p>
<p>d)</p>  <p style="text-align: center;">_____ faces</p>	<p>e)</p>  <p style="text-align: center;">_____ faces</p>	<p>f)</p>  <p style="text-align: center;">_____ faces</p>
<p>g)</p>  <p style="text-align: center;">_____ faces</p>	<p>h)</p>  <p style="text-align: center;">_____ faces</p>	<p>i)</p>  <p style="text-align: center;">_____ faces</p>