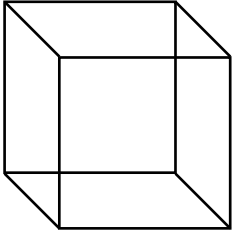
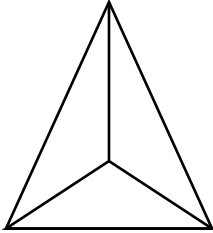
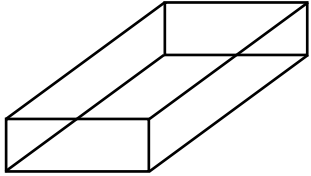
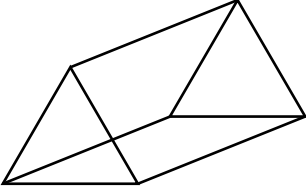
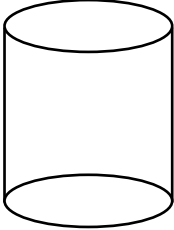
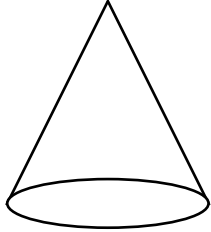
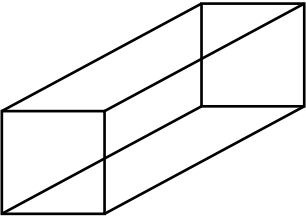
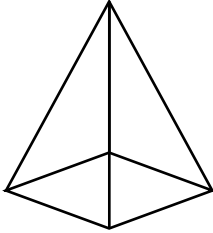
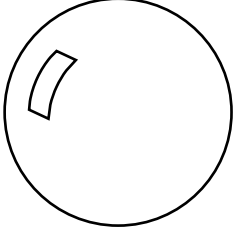


Les solides

Faces, arêtes et sommets

Écris le nombre de faces, d'arêtes
et de sommets que contient chacun des solides.

<p>a)</p>  <p>Faces : _____ Arêtes : _____ Sommets : _____</p>	<p>b)</p>  <p>Faces : _____ Arêtes : _____ Sommets : _____</p>	<p>c)</p>  <p>Faces : _____ Arêtes : _____ Sommets : _____</p>
<p>d)</p>  <p>Faces : _____ Arêtes : _____ Sommets : _____</p>	<p>e)</p>  <p>Faces : _____ Arêtes : _____ Sommets : _____</p>	<p>f)</p>  <p>Faces : _____ Arêtes : _____ Sommets : _____</p>
<p>g)</p>  <p>Faces : _____ Arêtes : _____ Sommets : _____</p>	<p>h)</p>  <p>Faces : _____ Arêtes : _____ Sommets : _____</p>	<p>i)</p>  <p>Faces : _____ Arêtes : _____ Sommets : _____</p>