

# Compter jusqu'à 9

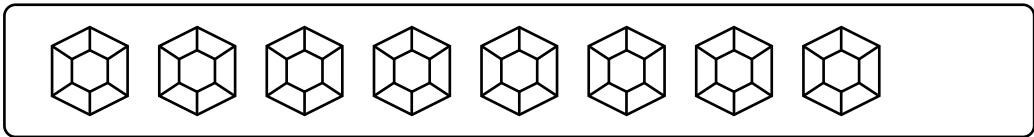
Compte et écris le nombre de pierres précieuses dans chaque encadré.

a)



\_\_\_\_\_

b)



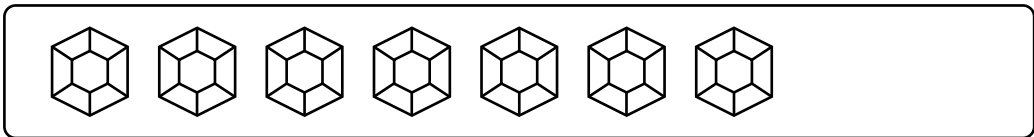
\_\_\_\_\_

c)



\_\_\_\_\_

d)




\_\_\_\_\_

e)



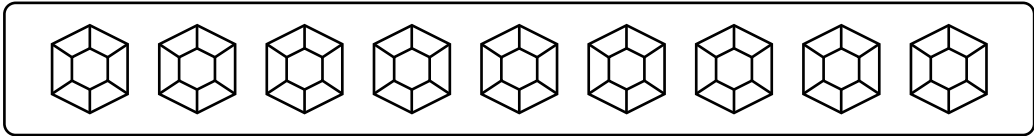
\_\_\_\_\_

f)



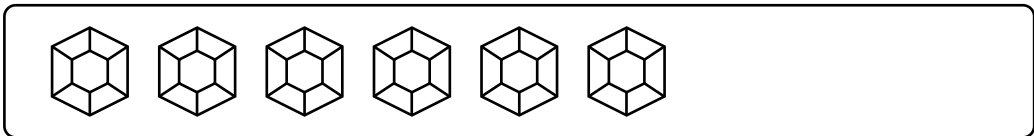
\_\_\_\_\_

g)



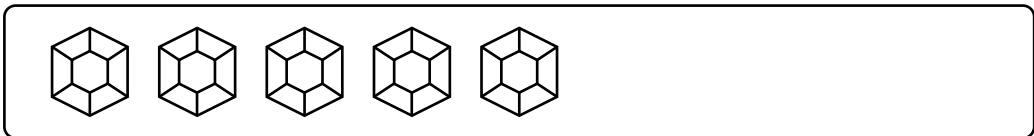
\_\_\_\_\_

h)



\_\_\_\_\_

i)



\_\_\_\_\_

Nom : \_\_\_\_\_

Date : \_\_\_\_\_

## Compter jusqu'à 9

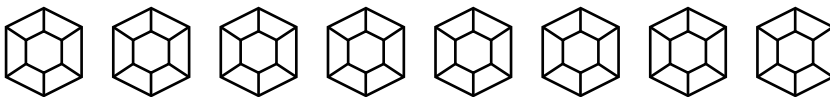
Compte et écris le nombre de pierres précieuses dans chaque encadré.

a)



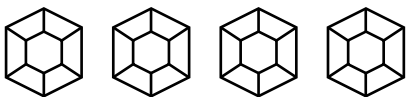
1

b)



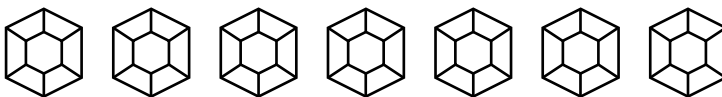
8

c)



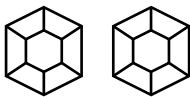
4

d)



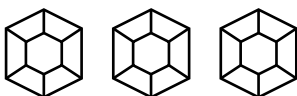
7

e)



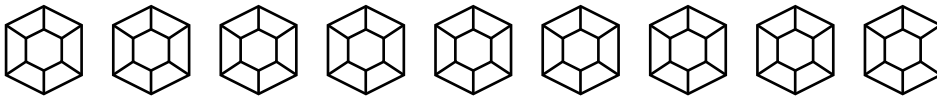
2

f)



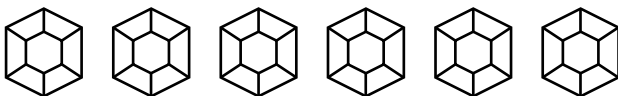
3

g)



9

h)



6

i)



5