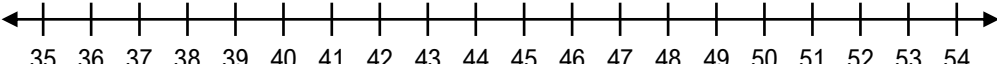
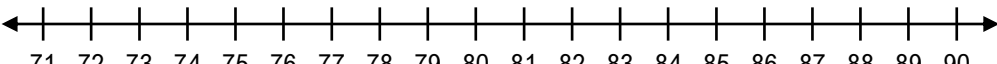


## Soustraire sur une droite numérique

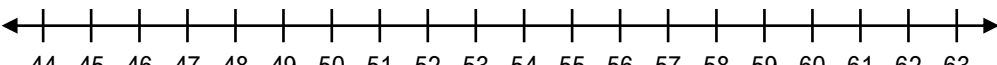
Trouve la différence de chaque soustraction en te servant de la droite numérique.

a)  $48 - 6 =$   

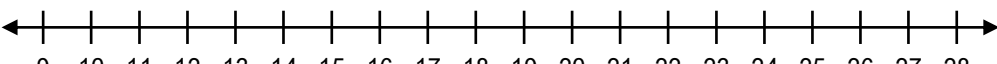
A horizontal number line with arrows at both ends, labeled with integers from 35 to 54. Tick marks are placed at every integer.

b)  $86 - 9 =$   

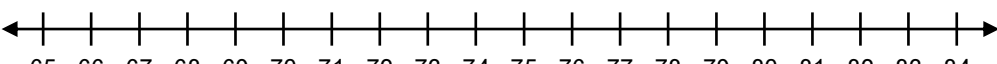
A horizontal number line with arrows at both ends, labeled with integers from 71 to 90. Tick marks are placed at every integer.

c)  $59 - 7 =$   

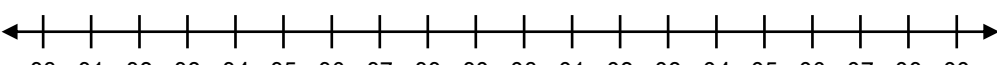
A horizontal number line with arrows at both ends, labeled with integers from 44 to 63. Tick marks are placed at every integer.

d)  $17 - 8 =$   

A horizontal number line with arrows at both ends, labeled with integers from 9 to 28. Tick marks are placed at every integer.

e)  $72 - 5 =$   

A horizontal number line with arrows at both ends, labeled with integers from 65 to 84. Tick marks are placed at every integer.

f)  $93 - 6 =$   

A horizontal number line with arrows at both ends, labeled with integers from 80 to 99. Tick marks are placed at every integer.